

Examples

Workout

x =



Click here

y =



Click here

x =



Scan here

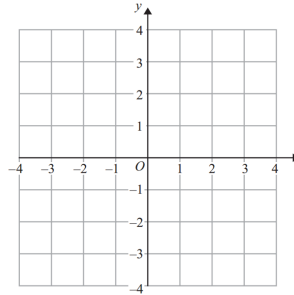
y =



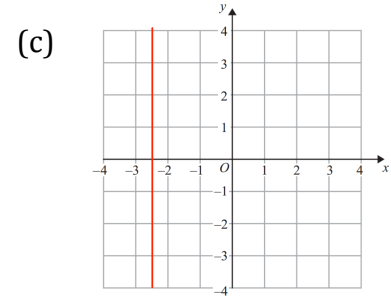
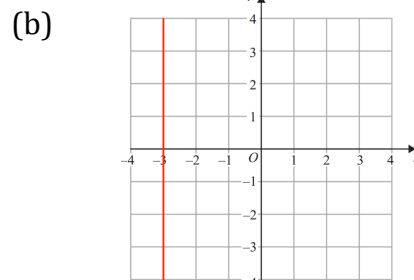
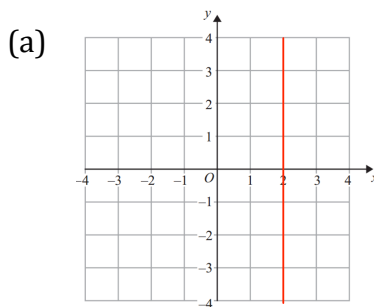
Scan here

Question 1: Draw the following graphs

- (a) $x = 1$
- (b) $x = 4$
- (c) $x = -2$
- (d) $x = 1.5$

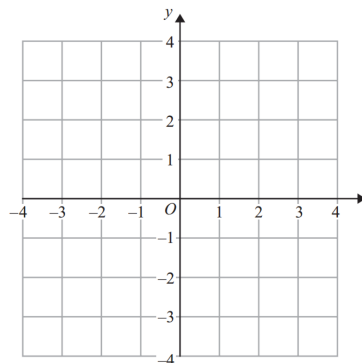


Question 2: Write down the equations of each of the lines shown below

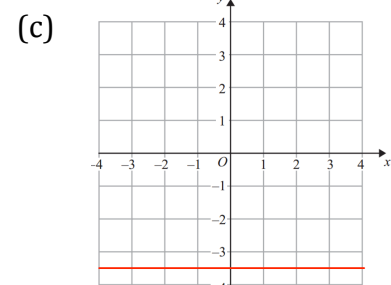
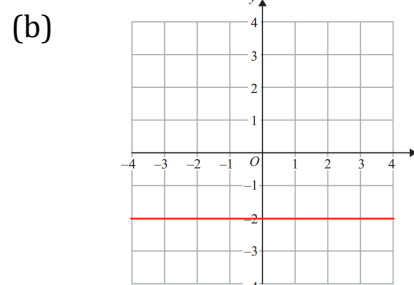
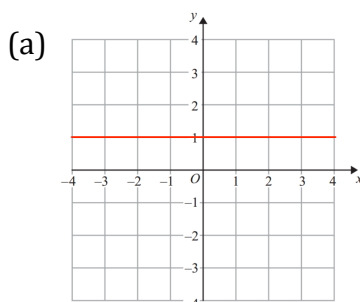


Question 3: Draw the following graphs

- (a) $y = 2$
- (b) $y = -1$
- (c) $y = -4$
- (d) $y = 0.5$



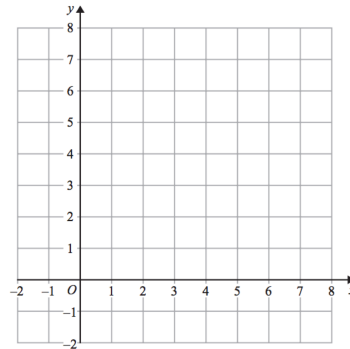
Question 4: Write down the equations of each of the lines shown below



Apply

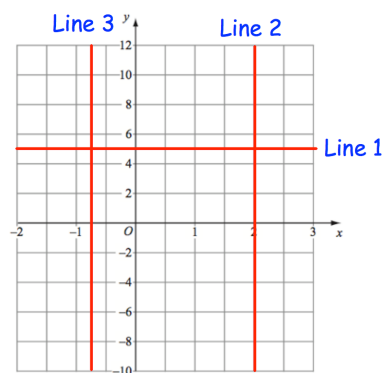
Question 1: On a copy of the grid shown

- (a) draw $y = 5$
- (b) draw $x = 4$
- (c) Write down where the two lines meet.



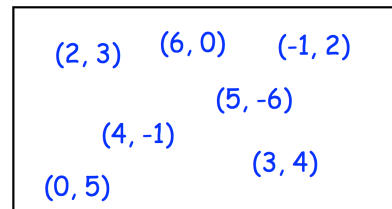
Question 2: Write down the equation of

- (a) Line 1
- (b) Line 2
- (c) Line 3

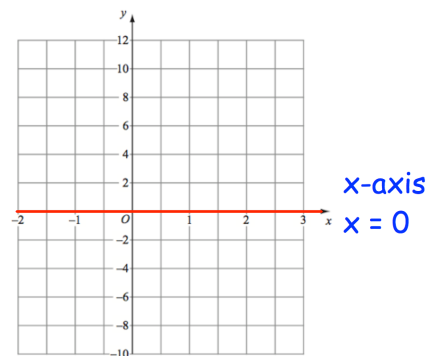
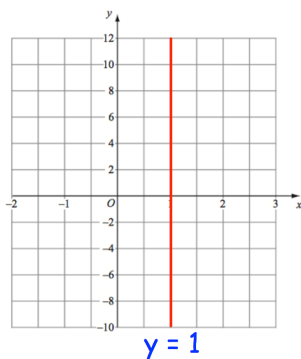


Question 3: From the box below, choose any coordinates that lie on:


- (a) $y = 2$
- (b) $x = 4$
- (c) $x = 3$
- (d) $y = -1$
- (e) the x-axis
- (f) the y-axis



Question 4: Michael has completed his homework
Can you spot any mistakes?



Answers



Click here



Scan here